

Y4 Homework 19 answers

MAGICAL CARD		POKEMON		PLURALS		CLOZE CATERPILLAR	
1	B	11	A	23	A	34	B
2	D	12	B	24	B	35	A
3	A	13	C	25	C	36	A
4	A	14	D	26	D	37	C
5	D	15	A	27	D	38	B
HOCKEY LEGEND		16	D	28	C	39	C
		FIND THE NOUNS		PUNCTUATIONS		40	A
6	D					41	A
7	A	17	B	29	C	42	B
8	B	18	A	30	B	43	C
9	C	19	C	31	A	44	A
10	D	20	A	32	A	45	C
		21	A	33	C	46	B
		22	C			47	A

TIME CORRECT ORDER		AFTER THE MONTH		time above	
				70	D
48	D	60	B	71	B
49	B	61	C	72	E
50	A	62	D	73	C
51	C	63	A	74	A
52	D	BEFORE THE MONTH		kevin	
53	A			75	D
54	C	64	B	76	B
55	B	65	B	77	A
56	D	66	C	24 hour clock	
57	A	67	A	78	B
58	B	I		79	A
59	C	68	B	80	C
		69	A	81	D
				82	D
				83	B
				84	C
				85	D

VERBAL REASONING		NVR	
86	C	96	D
87	B	97	A
88	C	98	B
89	A	99	B
90	A	100	E
91	D		
92	B		
93	C		
94	C		
95	A		

EXTRA QUESTIONS

NOUNS IN THE BOX		SPELLING	
1	A	I	
2	B	27	B
3	A	28	C
4	C	29	A
		30	D
		31	D
		32	A
		33	B
		34	C
		II	
		35	A
		36	A
		37	D
		38	C
		39	A
		40	D
		41	B
		42	A

UNITS OF TIME		25	D
		26	D
1	B	27	C
2	D	28	A
3	C	29	D
4	A	30	A
5	B	31	C
6	A	32	B
7	D	33	D
8	C	34	B
HOW MANY DAYS		35	A
		36	C
1	B		
2	C		
3	D		
4	B		
5	A		
6	C		
7	C		
10	D		

Y4 Homework 19 answers

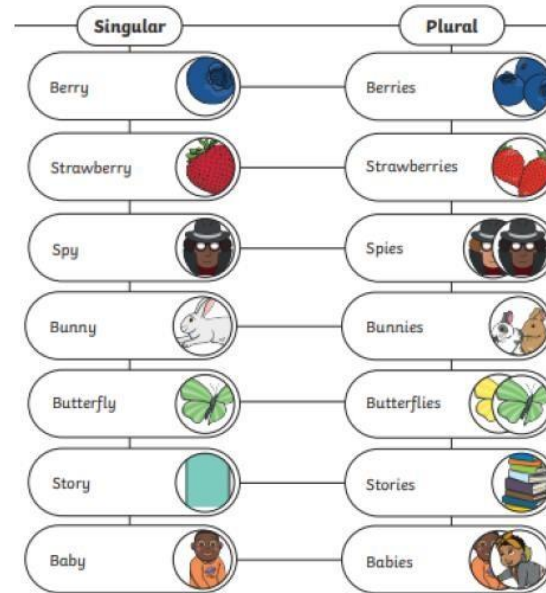
pokemon

Magical card

- 1) b
- 2) d
- 3) a
- 4) a
- 5) d

1. List three products that are included in the Pokémon franchise.
Include any three of the following: trading cards, video games, animated series, movies, toys.
2. How was the animated TV series extended?
It was made into movies.
3. What is on a Pokémon trading card?
An illustration of a Pokémon and 'stats' or information about it.
4. What are 'stats'?
'Stats' give information about the Pokémon such as its energy type and strength or weakness.
5. Which word in the text means 'to show or represent with a picture'?
Depict.
6. What kinds of Pokémon video games are available to play?
Simple puzzle games or detailed role play and quest games.

Plurals









spelling

was	watch
coat	mirror
floating	piece
blew	found
jumped	invisible
beautiful	cheerful
happier	nicest
combing	quickly

Hockey Legend

- 1) d
- 2) a
- 3) b
- 4) c
- 5) d

Nouns

- 1)  Next year, we are going to do an **Easter egg** hunt.
- 2)  In **spring**, lots of **daffodils** begin to sprout.
- 3)  The **Easter Bunny** sneakily hid the **eggs**.
- 4)  I ate so much **chocolate** I felt sick!
- 5)  The tiny, fluffy **chick** was so cute.
- 6)  Our **teacher**, Miss Watson, taught us lots about **Easter** today.

Full stops and capital letters

The cat was playing happily in the streets where he lived. The town was called **S**treet, which was very confusing for the poor postman. The cat's name was **T**iger and his owner was a small boy called **T**om. **E**very morning **T**iger would sit out on the wall waiting for the postman to deliver the letters to each house and every morning the postman would mumble about how confusing the addresses were.

Proper nouns

The following words should be circled: january; james; claire; saturday; lauren; friday; london

cloze

Time

- 1) green
- 2) nibbling
- 3) appetite
- 4) crawled
- 5) chrysalis
- 6) remained
- 7) power
- 8) sweetness
- 9) something
- 10) occupant
- 11) acquired
- 12) discovered
- 13) borne
- 14) hind

1. Look at the days of week above. Write them in the correct order.
Monday, Tuesday, Wednesday, Thursday, Friday, Saturday, Sunday
2. Answer the units of time questions below.
 - a) How many seconds are there in a minute? 60 seconds
 - b) How many days are there in a week? 7 days
 - c) How many months are there in a year? 12 months
 - d) How many minutes are there in an hour? 60 minutes
 - e) How many hours are there in a day? 24 hours
 - f) How many days are there in a year? 365 days
 - g) How many days are there in a leap year? 366 days
 - h) How many weeks are there in a year? 52 weeks
3. Which month comes after the months below?

February <u>March</u>	August <u>September</u>
January <u>February</u>	April <u>May</u>
4. Which month comes before the months below?

December <u>November</u>	June <u>May</u>
August <u>July</u>	November <u>October</u>
5. How many days are there in the following months and weeks?

December <u>31 days</u>	3 weeks <u>21 days</u>
June <u>30 days</u>	January and March <u>62 days</u>
April and May <u>61 days</u>	2 weeks <u>14 days</u>
6. If the 1st of January was a Thursday, what day of the week would the 19th of January be?
Monday
7. Jasmine went to Spain on Friday 16th June. She returned on 21st June. What day was this?
Wednesday
8. a) If the first of April is on Thursday, how many Fridays will there be in that month?
5 Fridays
b) Explain how you got your answer.
Accept any response that recognises that there are 30 days in April (just over 4 weeks) therefore if the 1st falls on a Thursday, there will be 5 Fridays before the end of the month.

- 9) 7:55 pm
- 10) d
- 11) b
- 12) e
- 13) c
- 14) a
- 15) 2:25pm
- 16) 10 min
- 17) 3:55pm
- 18) b
- 19) a
- 20) c
- 21) D
- 22) D
- 23) b
- 24) c
- 25) d
- 26) 122
- 27) wedd
- 28) 22
- 29) 13:35
- 30) 6:10 am
- 31) 24
- 32) 60
- 33) 60
- 34) 4hr 5min
- 35) 3hr 30 mir
- 36) 22 hr 15 n

VR

- 1) z -
- 2) e -
- 3) o -
- 4) k -
- 5) d -
- 6) k -
- 7) l -
- 8) g -
- 9) e -
- 10) p -

NVR(analogy)

- 1) D
The figure rotates 180 degrees and the circles turn grey.
- 2) A
The lines move outside the large shape and the large shape disappears. The small white shape moves down.
- 3) B
The figure reflects across and the top shape turns black.
- 4) B
The white parts of the figure turn black and the hatched parts turn white.
- 5) E
The grey shapes move to the top of the white shape. The two black dots move to the bottom of the figure, outside the white shape.