

Y4 FREE

Mini Mock

www.lifechangingtuition.com

English (30 Mins)

Comprehension Passage

Read the passage below carefully and answer the questions that follow.

The Secret

Emma was a curious girl who loved exploring new places. One sunny afternoon, while visiting her grandmother's old house, she noticed a small door at the back of the garden. The door was hidden behind thick vines and colorful flowers. Emma wondered where it led. She pushed aside the branches and tried the handle. To her surprise, the door creaked open.

Beyond the door was a beautiful garden she had never seen before. The garden was filled with vibrant flowers, tall trees, and butterflies fluttering around. A narrow path wound through the garden, inviting her to explore further. As Emma walked along the path, she heard the gentle sound of a stream flowing nearby.

She followed the sound and found a small pond with crystal-clear water. In the middle of the pond was a stone statue of a swan. Emma sat by the pond, enjoying the peaceful surroundings. She noticed that the garden seemed untouched, as if no one had been there for a long time.

Suddenly, she heard a rustling sound behind her. Turning around, she saw a small rabbit peeking out from behind a bush. The rabbit had soft, white fur and bright eyes. It hopped towards her and stopped right at her feet. Emma gently reached out to pet the rabbit, and it didn't run away.

"Hello there," she whispered. "Do you live here?" The rabbit twitched its nose, as if understanding her. Emma spent the afternoon playing with the rabbit and exploring the secret garden. She found all sorts of interesting things: a treehouse hidden among the branches, flowers she had never seen before, and even a tiny wooden bridge crossing the stream.

As the sun began to set, Emma realized it was time to go back. She said goodbye to the rabbit and made her way back to the small door. Before leaving, she looked back at the magical place one last time. She decided she would return the next day to continue her adventures.

When Emma told her grandmother about the garden, her grandmother smiled softly. "Ah, you found the secret garden," she said. "It was my special place when I was your age. I'm glad you've discovered it too."

Emma felt a warm feeling in her heart. She knew that the secret garden was now her special place as well.

Questions 1-15: Comprehension

1. Where did Emma find the small door?
 - A) In her bedroom
 - B) At the back of the garden
 - C) In the attic
 - D) Under the staircase
 - E) In the basement
2. What was hiding the door?
 - A) A pile of rocks
 - B) Thick vines and flowers
 - C) A large tree
 - D) A curtain
 - E) A bookshelf
3. How did Emma feel when she opened the door?
 - A) Scared
 - B) Angry
 - C) Surprised
 - D) Sad
 - E) Bored
4. What did Emma find beyond the door?
 - A) A desert
 - B) A secret garden
 - C) A dark cave
 - D) A busy city
 - E) A sandy beach
5. Which of these was NOT mentioned in the garden?
 - A) Vibrant flowers
 - B) Tall trees

- C) Flying birds
 - D) Butterflies
 - E) A stone statue
6. What was in the middle of the pond?
- A) A fountain
 - B) A boat
 - C) A stone statue of a swan
 - D) A large fish
 - E) A water lily
7. How did the rabbit react when Emma reached out to pet it?
- A) It ran away
 - B) It bit her
 - C) It stayed and let her pet it
 - D) It called other rabbits
 - E) It disappeared
8. What did Emma find hidden among the branches?
- A) A bird's nest
 - B) A treehouse
 - C) A squirrel
 - D) A beehive
 - E) A kite
9. Why did Emma decide to leave the garden?
- A) She was frightened
 - B) She was hungry
 - C) The sun was setting
 - D) It started to rain
 - E) Her grandmother called her
10. How did Emma's grandmother react when told about the garden?

- A) She was angry
- B) She was surprised
- C) She smiled softly
- D) She didn't believe Emma
- E) She forbade Emma from going back

11. What did Emma's grandmother say about the garden?

- A) She didn't know about it
- B) It was dangerous
- C) It was her special place when she was Emma's age
- D) It was off-limits
- E) It was haunted

12. What did Emma feel when her grandmother told her about the garden?

- A) Angry
- B) Embarrassed
- C) Happy
- D) Jealous
- E) Indifferent

13. Which of the following did Emma NOT do in the garden?

- A) Play with a rabbit
- B) Explore a treehouse
- C) Cross a tiny wooden bridge
- D) Swim in the pond
- E) Sit by the pond

14. What kind of place was the garden for Emma?

- A) Scary and dark
- B) Boring and plain
- C) Magical and special
- D) Noisy and crowded

- E) Dangerous and frightening

15. What is the main theme of the passage?

- A) The importance of obeying rules
 - B) Discovering new places can be magical
 - C) Animals are not to be trusted
 - D) Always stay indoors
 - E) Grandparents keep secrets
-

Questions 16-35: Proofreading

For each sentence below, select the option that corrects any error in spelling, punctuation, or grammar. If there is no error, select option E.

16. "Emma was a curious girl she loved exploring new places."

- A) Add a comma after "girl"
- B) Add "and" after "girl"
- C) Replace the comma with a semicolon
- D) Add a period after "girl" and capitalize "she"
- E) No correction needed

17. "She noticed a small door at the back of the garden"

- A) Add a comma after "door"
- B) Add a period at the end of the sentence
- C) Change "noticed" to "notice"
- D) Change "small" to "smal"
- E) No correction needed

18. "The door was hidden behind thick vines, and colorful flowers."

- A) Remove the comma after "vines"
- B) Change "and" to "but"
- C) Add a comma after "door"
- D) Change "hidden" to "hide"

- E) No correction needed

19. "She pushed aside the branches and tried the handle"

- A) Add a comma after "branches"
- B) Change "tried" to "tryed"
- C) Add a period at the end of the sentence
- D) Change "aside" to "a side"
- E) No correction needed

20. "To her surprise the door creaked open."

- A) Add a comma after "surprise"
- B) Change "creaked" to "creaks"
- C) Add "and" after "surprise"
- D) Change "door" to "doar"
- E) No correction needed

21. "Beyond the door was a beautiful garden she had never seen before."

- A) Add a comma after "garden"
- B) Change "seen" to "saw"
- C) Add "and" after "garden"
- D) Change "was" to "were"
- E) No correction needed

22. "Emma sat by the pond enjoying the peaceful surroundings."

- A) Add a comma after "pond"
- B) Change "enjoying" to "enjoy"
- C) Add "and" after "pond"
- D) Change "peaceful" to "peacful"
- E) No correction needed

23. "She noticed that the garden seemed untouched as if no one had been there."

- A) Add a comma after "untouched"
- B) Change "seemed" to "seems"

- C) Add "but" after "untouched"
- D) Change "had" to "has"
- E) No correction needed

24. "Turning around she saw a small rabbit peeking out from behind a bush."

- A) Add a comma after "around"
- B) Change "peeking" to "peeking"
- C) Change "rabbit" to "rabit"
- D) Add "and" after "around"
- E) No correction needed

25. "It hopped towards her and stopped right at her feet."

- A) Change "hopped" to "hop"
- B) Add a comma after "her"
- C) Change "stopped" to "stoped"
- D) Add "but" after "and"
- E) No correction needed

26. "Emma gently reached out to pet the rabbit and it didn't run away."

- A) Add a comma after "rabbit"
- B) Change "gently" to "gentlely"
- C) Change "didn't" to "didnt"
- D) Add "but" after "rabbit"
- E) No correction needed

27. "She whispered Hello there do you live here?"

- A) Add quotation marks around "Hello there do you live here?"
- B) Add a comma after "whispered"
- C) Add a question mark after "there"
- D) Change "whispered" to "whisper"
- E) No correction needed

28. "As the sun began to set Emma realized it was time to go back."

- A) Add a comma after "set"
- B) Change "realized" to "realizes"
- C) Add "and" after "set"
- D) Change "began" to "begin"
- E) No correction needed

29. "Before leaving she looked back at the magical place one last time."

- A) Add a comma after "leaving"
- B) Change "looked" to "looks"
- C) Change "magical" to "magicle"
- D) Add "and" after "leaving"
- E) No correction needed

30. "When Emma told her grandmother about the garden her grandmother smiled."

- A) Add a comma after "garden"
- B) Change "told" to "tells"
- C) Add "and" after "grandmother"
- D) Change "smiled" to "smile"
- E) No correction needed

31. "Ah you found the secret garden she said."

- A) Add quotation marks around "Ah you found the secret garden she said."
- B) Add commas after "Ah" and "garden"
- C) Add a period after "garden"
- D) Change "found" to "find"
- E) No correction needed

32. "Emma felt a warm feeling in her heart she knew it was her special place."

- A) Add a comma after "heart"
- B) Add "and" after "heart"
- C) Replace the comma with a semicolon
- D) Add a period after "heart" and capitalize "she"

- E) No correction needed

33. "She knew that the secret garden was now her special place as well."

- A) Add a comma after "place"
- B) Change "knew" to "knows"
- C) Change "was" to "were"
- D) Add "but" after "place"
- E) No correction needed

34. "Emma decided she would return the next day to continue her adventures."

- A) Add a comma after "decided"
- B) Change "would" to "will"
- C) Add a comma after "day"
- D) Change "adventures" to "adventurs"
- E) No correction needed

35. "The garden was filled with vibrant flowers tall trees and butterflies."

- A) Add commas after "flowers" and "trees"
- B) Change "filled" to "fill"
- C) Add "but" after "trees"
- D) Change "vibrant" to "vibrent"
- E) No correction needed

Mathematics Section (30 mins)

1. What is $56 + 39$?

- A) 85
- B) 86
- C) 89
- D) 95
- E) 96

2. What is $123 - 47$?

- A) 66
- B) 76
- C) 86
- D) 96
- E) 106

3. What is the value of 8×7 ?

- A) 48
- B) 54
- C) 56
- D) 63
- E) 72

4. What is $64 \div 8$?

- A) 6
- B) 7
- C) 8
- D) 9
- E) 10

5. Which fraction is equivalent to $\frac{2}{4}$?

- A) $\frac{1}{2}$
- B) $\frac{3}{4}$
- C) $\frac{2}{3}$
- D) $\frac{1}{3}$
- E) $\frac{3}{6}$

6. What is the next number in the sequence: 3, 6, 9, ___?

- A) 10
- B) 11
- C) 12
- D) 13
- E) 14

7. If you have £5.00 and you spend £2.75, how much money do you have left?

- A) £1.25
- B) £2.15
- C) £2.25
- D) £2.35
- E) £2.45

8. What is $\frac{1}{4}$ of 32?

- A) 6
- B) 7
- C) 8
- D) 9
- E) 10

9. Which of these shapes has 6 sides?

- A) Triangle
- B) Square
- C) Pentagon
- D) Hexagon
- E) Octagon

10. What is 5×9 ?

- A) 40
- B) 42
- C) 45
- D) 48
- E) 50

11. What is the perimeter of a rectangle with length 10 cm and width 4 cm?

- A) 14 cm
- B) 28 cm
- C) 40 cm
- D) 80 cm
- E) 140 cm

12. What is $\frac{1}{5}$ of 35?

- A) 5
- B) 6
- C) 7
- D) 8
- E) 9

13. If a clock shows 2:30 pm, what time will it be in 45 minutes?

- A) 3:00 pm
- B) 3:15 pm
- C) 3:30 pm
- D) 3:45 pm
- E) 4:00 pm

14. What is $0.6 + 0.4$?

- A) 0.8
- B) 0.9
- C) 1.0
- D) 1.1
- E) 1.2

15. Which of these numbers is a multiple of both 2 and 5?

- A) 10
- B) 12
- C) 14
- D) 15
- E) 20

16. What is 7×7 ?

- A) 42
- B) 45
- C) 49
- D) 56
- E) 63

17. How many degrees are in a straight angle?

- A) 45 degrees
- B) 90 degrees
- C) 120 degrees
- D) 150 degrees
- E) 180 degrees

18. What is the value of $200 - 157$?

- A) 33
- B) 43
- C) 53
- D) 63
- E) 73

19. If one notebook costs £1.25, how much do 8 notebooks cost?

- A) £8.00
- B) £9.00
- C) £10.00
- D) £10.50
- E) £12.00

20. Which of these fractions is the largest?

- A) $\frac{1}{2}$
- B) $\frac{3}{4}$
- C) $\frac{2}{3}$
- D) $\frac{1}{5}$
- E) $\frac{1}{6}$

21. What is the area of a rectangle with length 9 cm and width 2 cm?

- A) 11 cm^2
- B) 18 cm^2
- C) 20 cm^2
- D) 22 cm^2
- E) 24 cm^2

22. If a shape has 3 sides of equal length and 3 equal angles, what is it called?

- A) Scalene triangle
- B) Isosceles triangle
- C) Equilateral triangle
- D) Right-angled triangle
- E) Obtuse triangle

23. What is $\frac{3}{5}$ of 25?

- A) 10
- B) 12
- C) 13
- D) 15
- E) 18

24. Which number comes next in the pattern: 10, 20, 30, 40, ___?

- A) 45
- B) 48
- C) 50
- D) 55
- E) 60

25. What is the sum of 678 and 234?

- A) 802
- B) 812
- C) 912
- D) 922
- E) 932

26. How many minutes are there in 1.5 hours?

- A) 60 minutes
- B) 75 minutes
- C) 80 minutes
- D) 90 minutes
- E) 100 minutes

27. If Lily has 4 baskets with 5 apples each, how many apples does she have?

- A) 15
- B) 18
- C) 20
- D) 22
- E) 25

28. What is the smallest prime number greater than 20?

- A) 21
- B) 22
- C) 23
- D) 24
- E) 25

29. If a triangle has sides of length 6 cm, 6 cm, and 4 cm, what type of triangle is it?

- A) Scalene
- B) Isosceles
- C) Equilateral
- D) Right-angled
- E) Obtuse

30. What is 9×8 ?

- A) 64
- B) 70
- C) 72
- D) 80
- E) 88

31. What is the remainder when 50 is divided by 7?

- A) 0
- B) 1
- C) 2
- D) 3
- E) 4

32. If Sam buys 5 pens at 60p each, how much does he spend?

- A) £2.50
- B) £2.80
- C) £3.00
- D) £3.20
- E) £3.50

33. Which number is one more than 999?

- A) 998
- B) 999
- C) 1000
- D) 1001
- E) 1010


34. What is 0.25 as a fraction?

- A) $\frac{1}{4}$
- B) $\frac{1}{3}$
- C) $\frac{1}{2}$
- D) $\frac{2}{3}$
- E) $\frac{3}{4}$


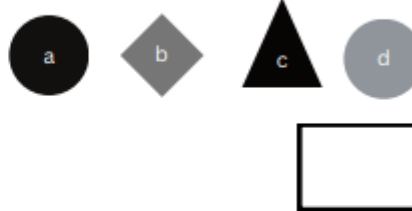
35. If a cube has edges of 3 cm, what is its volume?

- A) 6 cm^3
- B) 9 cm^3
- C) 18 cm^3
- D) 27 cm^3
- E) 36 cm^3


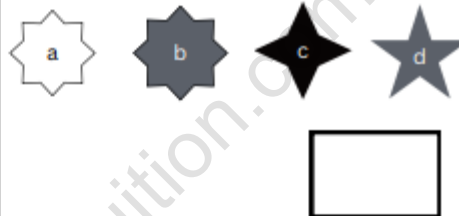
NVR (10 mins)



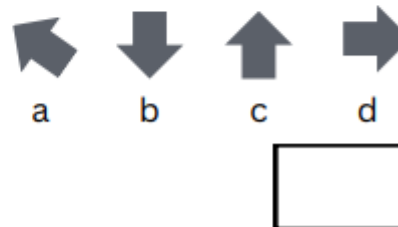
1.. Complete the grid.



2. Complete the grid.

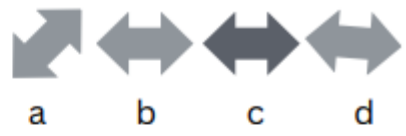


3. Complete the grid.






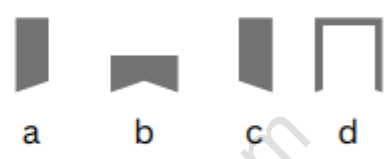
4.

if  is to 
then  is to **?**







5.

if  is to 
then  is to **?**



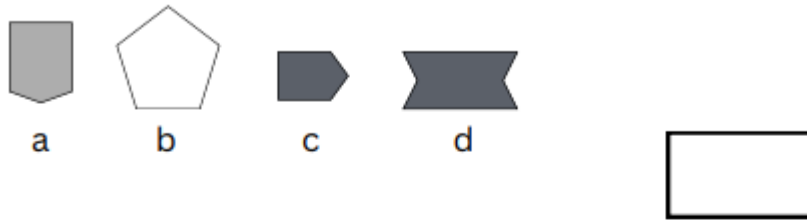
6.

if  is to 
then  is to **?**

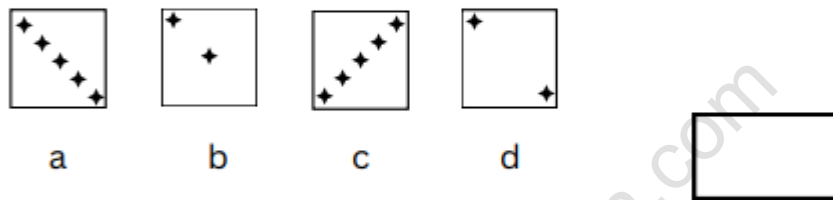


www.lifechangingtuition.com

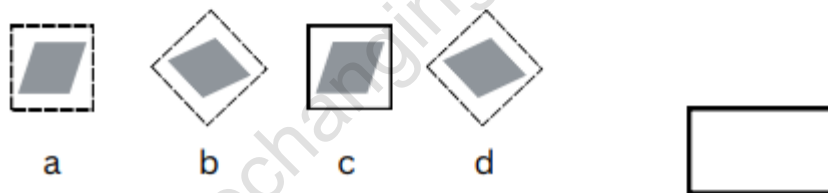
7. Select the odd one out.



8. Select the odd one out.



9. Select the odd one out.



10.




Select the most similar shape to the two on the left:



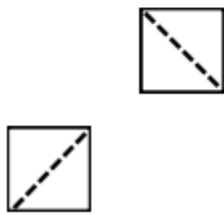
11.



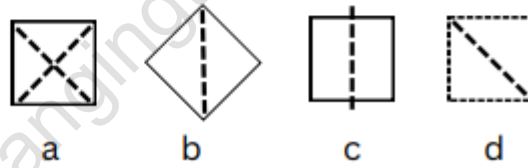
Select the most similar shape to the two on the left:



12.



Select the most similar shape to the two on the left:



Verbal Reasoning (15 mins)

Circle the odd one out.

1. cucumber brocolli peas apples lettuce
2. need weed plead seed yellow
3. bicycle skateboard car rollerblades unicycle
4. bow walk wind close tear
5. ward pots gnat lived rot

Circle the incorrectly spelt words.

6. thaw idiosynkratic hindrance drum recite
7. grind bruise plaintiff dredful forty
8. tantrum reckless beutiful feint snooze
9. slie icicle banana ruthless broad
10. tolerate demmand demonstrate fester ruler

Circle the two words that combine to make one word. e.g be + low = below.

11. fat comb like : ing ness her

12. pass comb like : real think age

13. air car train : plane port station

14. hall opt rind : mark ical full

15. pen man ship : age link full

Complete the number sequences.

16. 2, 3, 5, —, 12, 17, —,

17. 3, 6, 12, 24, —, 96, —,

18. 13, 16, 18, 21, —, —, 28,

19. 144, 133, 122, 111, —, —,

20. 987, —, 765, 654, 543, —,

End Of Test